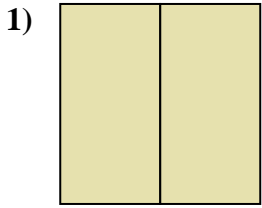
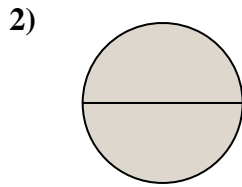




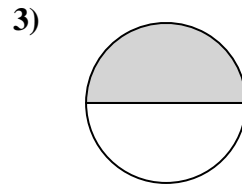
Determine which letter best describes the shaded portion.

Answers

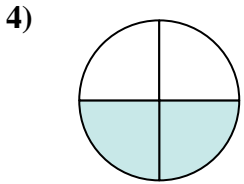
- A. one-fourth
B. two-quarters
C. two-halves



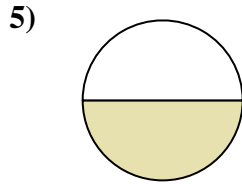
- A. two-halves
B. two-quarters
C. one-half



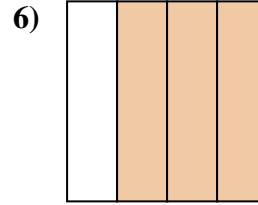
- A. three-quarters
B. one-half
C. four-fourths



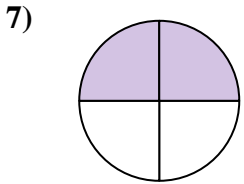
- A. two-halves
B. four-fourths
C. two-fourths



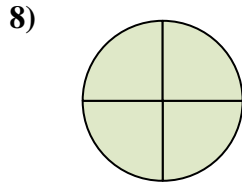
- A. two-halves
B. three-fourths
C. one-half



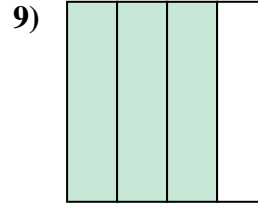
- A. one-half
B. three-quarters
C. two-halves



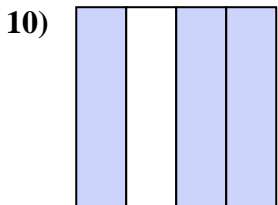
- A. four-fourths
B. three-quarters
C. two-quarters



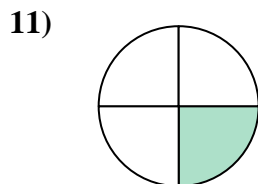
- A. two-fourths
B. one-quarter
C. four-fourths



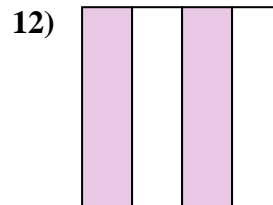
- A. two-halves
B. two-fourths
C. three-fourths



- A. two-fourths
B. one-quarter
C. three-quarters



- A. one-quarter
B. three-quarters
C. two-halves



- A. two-fourths
B. four-quarters
C. two-halves

1. _____

2. _____

3. _____

4. _____

5. _____

6. _____

7. _____

8. _____

9. _____

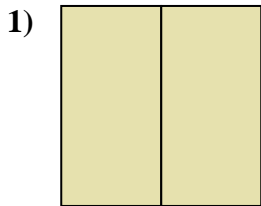
10. _____

11. _____

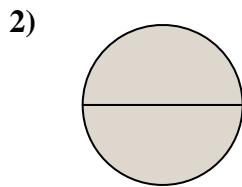
12. _____



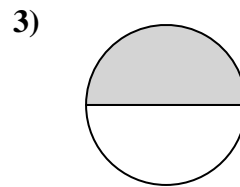
Determine which letter best describes the shaded portion.



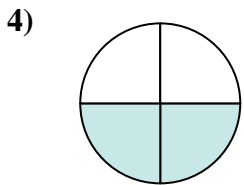
- A. one-fourth
B. two-quarters
C. two-halves



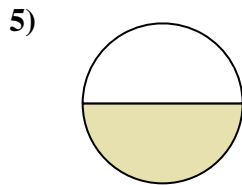
- A. two-halves
B. two-quarters
C. one-half



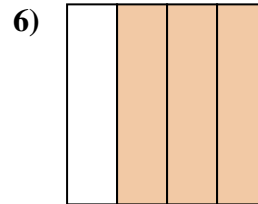
- A. three-quarters
B. one-half
C. four-fourths



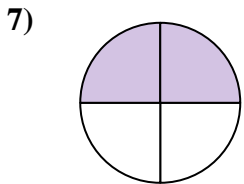
- A. two-halves
B. four-fourths
C. two-fourths



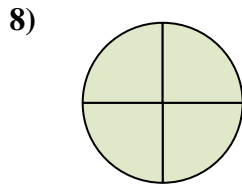
- A. two-halves
B. three-fourths
C. one-half



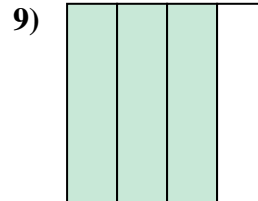
- A. one-half
B. three-quarters
C. two-halves



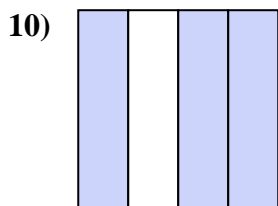
- A. four-fourths
B. three-quarters
C. two-quarters



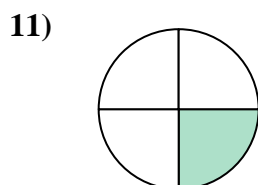
- A. two-fourths
B. one-quarter
C. four-fourths



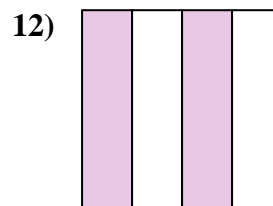
- A. two-halves
B. two-fourths
C. three-fourths



- A. two-fourths
B. one-quarter
C. three-quarters



- A. one-quarter
B. three-quarters
C. two-halves



- A. two-fourths
B. four-quarters
C. two-halves

Answers

1. **C**
2. **A**
3. **B**
4. **C**
5. **C**
6. **B**
7. **C**
8. **C**
9. **C**
10. **C**
11. **A**
12. **A**